

Name: _____

WEEKLY HOMEWORK PACKET 1/27 - 1/31

MUST BE RETURNED AT THE END OF THE WEEK - Friday, January 31st

Story of the Week: This week we will be starting Unit 10 in Foundations. In Language Arts we will be reading booklets about historical figures, continuing our Biography Unit. This is a cross-curricular unit that will allow students to write their own biography paragraphs about a historical figure that students will be researching over the next few weeks.

****Don't forget to turn in your \$15 donations and Field Trip Slip ASAP!****

| | Monday 1/27 | Tuesday 1/28 | Wednesday 1/29 | Thursday 1/30 |
|-------------|---|---|---|---|
| Math | Chapter 6 Review *worksheet attached | NO MATH HW TEST TODAY! | Intro. to Telling Time *worksheet attached | Lesson 7.8 *worksheet attached |
| Foundations | Foundations: Dictation Practice | Foundations: Dictation Practice | Foundations: Dictation Practice | Foundations: Dictation Practice |
| Reading | Read for a minimum of 20 minutes each day. An <u>adult must initial</u> the Reading Log. | Read for a minimum of 20 minutes each day. An <u>adult must initial</u> the Reading Log. | Read for a minimum of 20 minutes each day. An <u>adult must initial</u> the Reading Log. | Read for a minimum of 20 minutes each day. An <u>adult must initial</u> the Reading Log. |

Reading Log

| | Monday | Tuesday | Wednesday | Thursday |
|------------------|--------|---------|-----------|----------|
| Book Title | | | | |
| Parent Signature | | | | |
| Teacher Check | | | | |

Reminders/Looking Ahead:

- Turn in your \$15 Donations AND Field Trip Slips in ASAP!
- Check the 2nd Grade Website for Weekly Information: <http://chime2ndgrade.weebly.com/>

Attention Parents:

Fundations Dictation Practice Directions

Follow These 5 Steps Monday – Thursday Each Week:

1. Dictate the word or sentence.
2. Have your child repeat it.
3. Have your child write it on the corresponding page.
4. Check his/her work.
5. Make corrections as necessary.

| Day of the Week | Words to Dictate |
|----------------------------|---------------------------------|
| Monday (Review Words) | burn give cart marking smallest |
| Tuesday (Current Words) | clay paint say brain wait |
| Wednesday (Trick Words) | picture great country away |
| Thursday (Sentence) | Baseball is a fun game to play. |

REMEMBER: These words are selected for you child to practice spelling patterns and phonics skills. They are NOT spelling words and students will NOT be tested on how to spell each of these words.



Chapter 6 Review/Test

1. Mr. Kent's art class used 234 craft sticks. Ms. Reed's art class used 358 craft sticks. How many craft sticks did the two classes use?

+

_____ craft sticks

2. At the library, there are 668 books and magazines. There are 565 books at the library. How many magazines are there?

Circle the number that makes the sentence true.

There are

13
103
1,233

magazines.

3. There are 176 girls and 241 boys at school. How many children are at school?

$$\begin{array}{r} 176 \longrightarrow 100 + 70 + 6 \\ + 241 \longrightarrow 200 + 40 + 1 \\ \hline \end{array}$$

Select one number from each column to solve the problem.

| Hundreds | Tens | Ones |
|-------------------------|-------------------------|-------------------------|
| <input type="radio"/> 2 | <input type="radio"/> 1 | <input type="radio"/> 3 |
| <input type="radio"/> 3 | <input type="radio"/> 3 | <input type="radio"/> 5 |
| <input type="radio"/> 4 | <input type="radio"/> 4 | <input type="radio"/> 7 |

4. Anna wants to add 246 and 132

Help Anna solve this problem. Draw quick pictures.
Write how many hundreds, tens, and ones in all. Write the number.

| Hundreds <input type="checkbox"/> | Tens | Ones ° |
|-----------------------------------|------|--------|
| | | |

_____ hundreds _____ tens _____ ones

5. Mrs. Preston had 513 leaves. She gave 274 leaves to her students. Draw to show how you found your answer.

How many leaves does she still have?

_____ leaves

6. A farmer has 218 pecan trees and 435 walnut trees. About how many trees does he have in all?

How would you estimate the number of trees?
Fill in the bubble next to all the sentences that describe what you would do.

- ☐ I would add the hundreds digits.
- ☐ I would add $18 + 35$.
- ☐ I would regroup the ones.
- ☐ I would add $200 + 400$.

$$\begin{array}{r} 218 \\ + 435 \\ \hline \end{array}$$

Estimate!

Monday

Fundations Dictation Practice

1.

2.

3.

4.

5.

Tuesday

Foundations Dictation Practice

1.

2.

3.

4.

5.


Name: _____

IMD.B.3

~ Wednesday ~

Parts of a Clock

Cut and paste the labels for the parts of a clock.



© United Teaching 2016

hour hand

minute
hand

second
hand

minute
lines

hour
numbers

Wednesday

Foundations Dictation Practice

1.

2.


3.

4.


~Thursday~

Time to the Hour and Half Hour

It is zero minutes after the hour.
Look at how you write this time.



**3:00**

It is 30 minutes after the hour.
Look at how you write this time.



**3:30**

Look at the clock hands. Write the time.



1.




2.




3.




4.



5.



6.



Thursday

Foundations Dictation Practice

1.